

# 12<sup>th</sup> iOEL' 20

## International Olympiad of English Language



Organized by:  
**SILVERZONE**  
FOUNDATION  
NEW DELHI - INDIA

Presented by:  
**Silverzone Foundation**  
New Delhi, India  
For supremacy in English Language  
www.silverzone.org

### CLASS 4<sup>th</sup> SAMPLE QUESTIONS

*The Actual Question Paper Contains 50 Questions. The Duration of the Test Paper is 60 Minutes.*

#### Reading comprehension:

Subhash Chandra Bose was born on 23 January, 1897, at Cuttack in Orissa. He was the sixth son of Janakinath and Prabhavati Bose. He participated in the freedom movement along with 'Deshbandhu' C.R. Das. He was thrown into jail but that only made him more determined. Subhash joined the Congress party and rose to its Presidentship in 1938, a post he held for 2 years. In 1939, when the Second World War started Gandhiji and other leaders were against doing anything anti-British. But Subhash Chandra Bose thought differently. He knew, for instance, that the fall of the Roman Empire had led to the freedom of its colonies. He decided to seek foreign help for his cause of freeing India.

- In which state Subhash Chandra Bose was born?  
(A) Bengal (B) Orissa  
(C) Maharashtra (D) Uttar Pradesh
- Who was Subhash Chandra Bose?  
(A) A freedom fighter (B) A politician  
(C) A civil servant (D) A social worker

**Direction: Question 3 is based on analogy:**

- Court : Justice :: School : ?  
(A) Teacher (B) Student  
(C) Ignorance (D) Education

**Direction: Arrange the jumbled words to make a meaningful sentence:**

- will/ again/ apologize/ never/ he/ I/ here/ if/ him/ not/ invite  
(A) If he doesn't apologize, I will invite him never here again.  
(B) If he doesn't apologize, I will never invite him here again.  
(C) I will never invite him here again, he doesn't apologize if.  
(D) All of these

**Direction: Question 5 is based on Pronoun:**

- Identify the kind of pronoun the underline word has.  
The watch kept on the table is yours.  
(A) Possessive Pronoun (B) Demonstrative Pronoun  
(C) Reflexive Pronoun (D) Interrogative Pronoun

**Direction: In question 6, fill in the blank with suitable preposition:**

- She has been dancing \_\_\_\_\_ three hours.  
(A) To (B) For (C) At (D) From
- Which one of the following options joins the two given sentences correctly?  
The boys were unhappy with their results. The girls were also unhappy with theirs.  
(A) Neither the boys nor the girls were happy with their results.  
(B) Both boys, girls were unhappy about the result.  
(C) Boys and girls were unhappy with the results.  
(D) All of these

**Direction: In question 8, a grammatically incorrect sentence is given. Find the correct sentence from the options given below:**

- He will have reach there.  
(A) He will have reaching there.  
(B) He will have reaches there.  
(C) He will have reached there.  
(D) All of these

**Direction: In question 9, fill in the blank with correct form of verb:**

- She \_\_\_\_\_ first in the class last year.  
(A) Stand (B) Stood  
(C) Will stand (D) All of these

**10. Given below are the sentences in jumbled form. Rearrange them to make a meaningful paragraph.**

- The language has made an invaluable contribution towards the unification of our country. Today, it has become an integral part in every section of society, be it government, media or education.
  - English is one of the most widely spoken languages across the world. In India, it was introduced by Lord Bentinck and was supported by many eminent personalities and social reformers.
  - It is taught in public as well as in government schools. English is must for the Indians aspiring for higher education or seeking better job opportunities. It is very much a part of communication in urban society.
  - Though some people in India are against the usage of English, yet it is considered as a passport for a secure future.
- (A) 2, 1, 4, 3 (B) 4, 1, 2, 3  
(C) 2, 1, 3, 4 (D) 4, 1, 3, 2

#### ANSWERS

1. (B) 2. (A) 3. (D) 4. (B) 5. (A) 6. (B) 7. (A) 8. (C) 9. (B) 10. (C)

# 10<sup>th</sup> SmartKid GK Olympiad'19

Smart Kid  
General Knowledge Olympiad



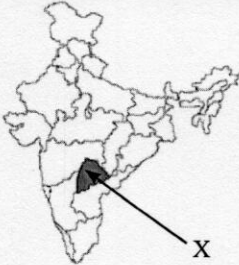








Presented by:  
**SILVER  
ZONE  
FOUNDATION**  
NEW DELHI - INDIA

Organized by:  
**Silverzone Foundation**  
New Delhi - India

www.silverzone.org

## CLASS 4th: SAMPLE QUESTIONS

The Actual Question Paper contains 50 questions. The duration of the test paper is 60 minutes.

- Where is the capital of Sikkim?  
(A) Gangtok (B) Kohima  
(C) Imphal (D) Guwahati
- Who invented telephone?  
(A) Alexander Graham Bell  
(B) Charles Babbage  
(C) Alexander Fleming  
(D) None of these
- Name the city and state wherein lord Rama was born.  
(A) Mathura- U.P. (B) Somnath- Gujarat  
(C) Nasik- Maharashtra (D) Ayodhya- U.P.
- Name the author of the book 'The Idea of Justice'.  
(A) Chetan Bhagat (B) Amartya Sen  
(C) Shashi Tharoor (D) Atal Bihari Vajpayee
- In the map of India shown below, the capital of the state represented by X is:  
  
(A) Bengaluru  
(B) Tamil Nadu  
(C) Thiruvananthapuram  
(D) Hyderabad
- Which one of the following is the widest river of the world?  
(A) Ganga (B) Brahmaputra  
(C) Nile (D) Amazon
- Who among the following was the captain of the Indian cricket team that won the world cup in 1983?  
(A)  (B)   
(C)  (D) 
- The Buddhist sages are called \_\_\_\_\_.  
(A) Saints (B) Monks (C) Preacher (D) Ulemas
- Scientists of the world unanimously decided to eliminate the name of one planet from our solar system. So now in our solar system there are eight planets instead of nine. Which one of the following has been eliminated as a planet?  
(A)  Mars (B)   
(C)  Mercury (D) 
- Which one of the following music directors of India won the Oscar award in the year 2009?  
(A) Anu Malik (B) Himesh Reshamiya  
(C) A.R. Rehman (D) All of these

### ANSWERS

1. (A) 2. (A) 3. (D) 4. (B) 5. (D) 6. (D) 7. (C) 8. (B) 9. (D) 10. (C)

# 12<sup>th</sup> iOM' 19

## International Olympiad of Mathematics



Presented by:  
**SILVER ZONE**  
FOUNDATION  
NEW DELHI - INDIA

Organized by:  
**Silverzone Foundation**  
New Delhi, India  
For supremacy in Mathematics  
www.silverzone.org

### CLASS : 4 (SYLLABUS & SAMPLE QUESTIONS)

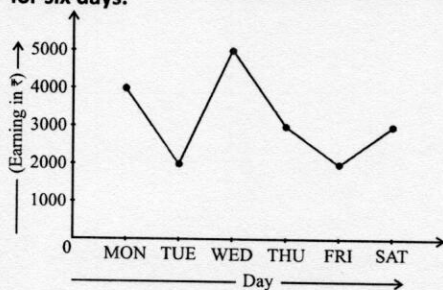
The Actual Question Paper Contains 50 Questions. The Duration of the Test Paper is 60 Minutes.

1. Which pair of numbers best completes the mathematical statement given below?

$$13 + \square - 7 = \bigcirc$$

- (A) 8 and 13      (B) 8 and 14  
(C) 9 and 18      (D) 9 and 14

2. The given line graph represents daily earning of a store for six days.



On which day, the earning was equal to the total earnings of Tuesday and Thursday?

- (A) Monday      (B) Wednesday  
(C) Friday      (D) Saturday

3. The missing digit in the given multiplication is:

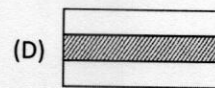
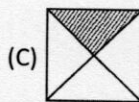
$$\begin{array}{r} 1 \square 73 \\ \times 6 \\ \hline 8838 \end{array}$$

- (A) 8      (B) 4  
(C) 2      (D) 6

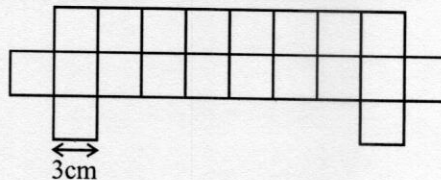
4. Roman numerals XL is same as:

- (A)  $100 + 40$       (B)  $60 - 10$   
(C)  $100 - 40$       (D)  $100 - 60$

5. In which one of the following figures, the fraction represented by the shaded parts is equal to  $\frac{1}{3}$ ?



6. What is the perimeter of the given figure?



- (A) 74 cm      (B) 86 cm  
(C) 84 cm      (D) 92 cm


7. If the cost of 9 metres long electric wire is ₹40.50, then the cost of 5 metres long such wire will be:

- (A) ₹ 22.50      (B) ₹ 32.50  
(C) ₹ 18.50      (D) ₹ 20.50

8. If two angles of a triangle are  $42^\circ$  and  $47^\circ$ , then the triangle is a/an:


- (A) acute-angled triangle.  
(B) obtuse-angled triangle.  
(C) right-angled triangle.  
(D) isosceles triangle.

9. Minimum how many more unit squares must be shaded so that the given figure has at least one line of symmetry?




- (A) 0                      (B) 1  
(C) 2                      (D) 3

10. What comes next in the given figure pattern?



- (A) (B)   
(C) (D)



ANSWERS

1. (B)    2. (B)    3. (B)    4. (D)    5. (D)    6. (C)    7. (A)    8. (B)    9. (C)    10. (B)

# 11<sup>th</sup> International Olympiad of Science 2019



Presented by:  
**SILVERZONE FOUNDATION**  
NEW DELHI - INDIA

Organized by:  
**Silverzone Foundation**  
New Delhi, India  
FOR SUPREMACY IN SCIENCE  
www.silverzone.org

## CLASS 4<sup>th</sup> SAMPLE QUESTIONS

The Actual Question Paper Contains 50 Questions. The Duration of the Test Paper is 60 Minutes.

1. Look at the diagram given below and choose the incorrect option.




- I. Food passes directly to X from mouth through food pipe.
  - II. Z is not a part of our digestive system.
  - III. Y is known as small intestine.
  - IV. No digestion of food takes place in X.
- (A) I and III                      (B) II and IV  
(C) I and IV                      (D) III and IV

2. Sometimes in the sky we see a string of light for a very few moment. Actually these are meteors which burn on entering into the atmosphere of the earth. Which one of the following gives the required heat energy to the meteors to be burnt?

- (A) Friction  
(B) Gravitation  
(C) Upthrust  
(D) All of these

3. Which one of the following is an arboreal animal?



4. Jasmine took some soil in a covered container. She heated it slowly, after some time she observed some droplets of water under the cover of the container. What does this show?

- (A) Soil has humus              (B) Soil has sand  
(C) Soil has gravel              (D) Soil has water

5. All the stars that we see in the sky are not equally bright. Choose the correct reason for this.

- (A) Distance of the star from us  
(B) Earth is a small planet  
(C) Amount of light that the star emits  
(D) Both (A) and (C)

6. Consider the following statements:

**Micky:** Work is always done by a force.

**Goofy:** A moving body can be stopped by applying force.

**Donald:** We do not need energy to write answers of this question paper.

Who is telling the wrong fact?

- (A) Goofy  
(B) Micky  
(C) Donald  
(D) All of them

7. Consider the statements given below:

**Krish:** Galaxy is a system of millions or billions of stars, together with gas and dust, held together by gravitational attraction.

**Superman:** Sun is present at the center of our galaxy milky way.

**Spiderman:** Sun is present at the center of our solar system.

Who is correct?

- (A) Krish  
(B) Krish and Spiderman  
(C) Spiderman  
(D) Superman and Spiderman

8. Which of these changes are not permanent?

- (A) Rusting of iron  
(B) Burning of paper  
(C) Growth of seedling into a plant  
(D) Change of water into ice

9. Which of the following statements is correct about the animal shown below?



- I. It lives in jungle and feeds completely on the rotten fruits.
  - II. It is a scavenger but can hunt other animals for obtaining its food.
  - III. It helps in keeping its surrounding clean by eating the flesh of dead animals.
  - IV. It is a kind of amphibian which lays eggs.
  - V. It belongs to vertebrates.
- (A) I, II and IV                      (B) II, III and IV  
(C) II, III and V                      (D) I, IV and V

10. The dangerous ultraviolet rays from the sun are stopped in the upper part of the atmosphere. The layer which protects us from harmful ultraviolet rays, is present mainly in:

- (A) Troposphere  
(B) Hydrosphere  
(C) Stratosphere  
(D) Exosphere

---

**ANSWERS**

1. (B)    2. (A)    3. (C)    4. (D)    5. (D)    6. (C)    7. (B)    8. (D)    9. (C)    10. (C)