

12th iOEL' 20

International Olympiad of English Language



Organized by:
**SILVER
ZONE
FOUNDATION**
NEW DELHI - INDIA

Presented by:
Silverzone Foundation
New Delhi, India
For supremacy in English Language
www.silverzone.org

CLASS 2nd SAMPLE QUESTIONS

The Actual Question Paper Contains 40 Questions. The Duration of the Test Paper is 60 Minutes.

Reading comprehension:

Rajiv Gandhi was the young Prime Minister of India. He was a true leader who sacrificed his life for the sake of nation. He became the Prime Minister of India after the death of his mother Indira Gandhi, who died while she was the Prime Minister of India. He was a visionary. He promoted science and technology in India.

- Who became the Prime Minister of India after the death of Indira Gandhi?
(A) Lal Bahadur Shastri
(B) Rajiv Gandhi
(C) Manmohan Singh
(D) All of these
- Who promoted science and technology in India?
(A) Jawaharlal Nehru
(B) Indira Gandhi
(C) Rajiv Gandhi
(D) All of these

Direction: In question 3, find the opposite meaning of the word written in capital letters below:


- LOVE
(A) Hate (B) Praise
(C) Help (D) All of these

- Identify the monument given in the picture below.



- (A) Qutub Minar (B) Red Fort
(C) India Gate (D) All of these

Direction: In question 5, arrange the jumbled words to make a meaningful sentence:

- Our, love, we, country.
(A) Love our country we.
(B) Country we love our.
(C) We love country our.
(D) We love our country.
- Which one of the following options describes the picture correctly?

(A) This is the picture of a fair. People fight here.
(B) This is the picture of a fair. People enjoy here.
(C) This is the picture of a fair. People do not come here.
(D) All of these

Direction: In question 7, identify noun in the following sentence:

- He comes from Patna.
(A) He (B) Comes (C) Patna (D) All of these
- Which one of the following words has been misspelled?
(A) Principael (B) Teacher
(C) Student (D) All of these
- What will you say when you request someone for help?
(A) Thank you (B) Sorry
(C) Excuse me (D) Please
- The definition of a word is given, you have to identify the word from the given options.
Definition: A student studying in the same class with you.
(A) Classmate (B) Friend
(C) Student (D) All of these

ANSWERS

1. (B) 2. (C) 3. (A) 4. (C) 5. (D) 6. (B) 7. (C) 8. (A) 9. (D) 10. (A)

12th iOM' 19

International Olympiad of Mathematics



Presented by:
**SILVER
ZONE
FOUNDATION**
NEW DELHI - INDIA

Organized by:

Silverzone Foundation
New Delhi, India
For supremacy in Mathematics
www.silverzone.org

CLASS : 2 SAMPLE QUESTIONS

The Actual Question Paper Contains 40 Questions. The Duration of the Test Paper is 60 Minutes.

1. Which one of the following numbers is more than 16 tens?

(A) 158 (B) 185 (C) 138 (D) 145

2. If the cost of 2 eggs is ₹ 8, then find the cost of 3 eggs.

(A) ₹ 16 (B) ₹ 12 (C) ₹ 10 (D) ₹ 18

3. In the morning, Mr. Mehta started driving his car at the time shown below in the clock. He reached his destination at 9 : 50 morning. How long did he drive the car?




(A) 55 minutes (B) 1 hour 15 minutes
(C) 1 hour 35 minutes (D) 1 hour 55 minutes

4. Arrange the number boxes given below to make the smallest possible three digit number.




(A) 758 (B) 875 (C) 578 (D) 587

5. Which one is the most suitable addition for the sum of the numbers of  given below?

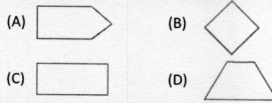


(A) $4 + 4 + 4 + 4 + 4 + 4 + 4 + 4$
(B) $6 + 6 + 6 + 6 + 6 + 6$
(C) $6 + 6 + 6 + 6$
(D) $4 + 4 + 4 + 4$

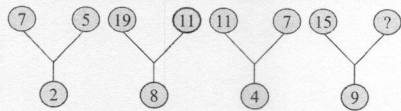
6. Which one of the following buckets can hold maximum water?



7. Which one of the following figures is square in shape?



8. Which one of the following numbers will replace the question mark (?) in the number pattern given below?

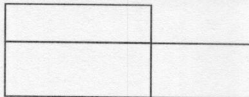


(A) 6 (B) 9 (C) 8 (D) 7

9. If $\bullet = 41$ and $\bullet + \blacktriangle = 67$, then the value of \blacktriangle is:

(A) 26 (B) 24 (C) 16 (D) 18

10. How many rectangles are there in the given figure?



(A) 4 (B) 5 (C) 3 (D) 6

ANSWERS

1. (B) 2. (B) 3. (C) 4. (C) 5. (C) 6. (C) 7. (B) 8. (A) 9. (A) 10. (B)

11th International Olympiad of Science 2019



Presented by:
SILVERZONE
FOUNDATION
NEW DELHI - INDIA

Organized by:
Silverzone Foundation
New Delhi, India
FOR SUPREMACY IN SCIENCE
www.silverzone.org

CLASS 2nd SAMPLE QUESTIONS

The Actual Question Paper Contains 40 Questions. The Duration of the Test Paper is 60 Minutes.

1. Which one of the following is the food for the animal given in the picture below?






- (A) Flesh (B) Fruits
(C) Vegetables (D) Rice

2. Steve's mother overcooked the food at home. What is the result of overcooking of food?

- (A) Loss of nutrients (B) Loss of salt
(C) Loss of spices (D) All of these

3. Which of the following is a rock?

- (A)  Slate (B)  Sandstone
(C)  Granite (D) All of these

4. Which one of the following options is correct for the picture of silkworm shown below?



- (A) It will grow to become an insect.
(B) It will grow to become a snake.
(C) It will grow to become a bird.
(D) It will grow to become a fish.

5. Leg muscle is shown below. Which of the following statements is incorrect for the given figure?



- (i) Muscles are covered with bones.
(ii) There are around 60 muscles in our body.
(iii) Bones are covered with muscles.

(iv) Our body has more than 600 muscles.

- (A) (i) and (ii) (B) (ii) and (iii)
(C) (iii) and (iv) (D) (i) and (iv)

6. Identify the wild animal from the options given below.



- (D) All of these

7. Which one of the following processes is best explained in the picture given below?



- (A) Freezing (B) Melting
(C) Evaporation (D) Photosynthesis

8. Which one of the following statements is correct?

Statement 1: Living and non living things both are important for us.

Statement 2: Only living things are important for us.

- (A) Statement 1 is correct
(B) Statement 2 is correct
(C) Both statement 1 and 2 are correct
(D) Both statement 1 and 2 are incorrect

9. Which one of the following options contain only seeds?

- (A) Mustard, sugarcane, rice, carrot, broccoli
(B) Ginger, rice, wheat, corn, cabbage
(C) Wheat, rice, oat, corn, beans
(D) Wheat, cabbage, radish, corn, barley

10. Consider the following statements:

Harry: Our brain helps us to think.

Garry: Brain is a part of nervous system.

Larry: Spinal cord is also a part of skeletal system.

Who is correct?

- (A) Harry and Larry (B) Garry and Larry
(C) Harry and Garry (D) Harry, Larry and Garry

ANSWERS

1. (A) 2. (A) 3. (D) 4. (A) 5. (A) 6. (C) 7. (C) 8. (A) 9. (C) 10. (C)

10th SmartKid GK Olympiad'19

Smart Kid
General Knowledge Olympiad



Presented by:
**SILVER
ZONE
FOUNDATION**
NEW DELHI - INDIA

Organized by:
Silverzone Foundation
New Delhi - India

www.silverzone.org





CLASS 2nd: SAMPLE QUESTIONS

The Actual Question Paper contains 40 questions. The duration of the test paper is 60 minutes.

1. Which one of the following is a neighbouring country of India?

- (A) Nepal (B) Thailand
(C) Iran (D) America

2. Which one of the following planets is the biggest planet in our universe?

- (A)  Earth (B)  Jupiter
(C)  Mars (D)  Venus

3. People are known by their places. For example people of Mumbai are called Mumbaikars. Accordingly the people of Delhi are called _____.

- (A) Delhitians (B) Delhites
(C) Delhikars (D) Delhians





4. How many lions are there in the National Emblem of India?

- (A) Two (B) Three (C) Four (D) Five

5. When is the International Yoga day celebrated?

- (A) 5th June (B) 8th March
(C) 21st May (D) 21st June

6. 'Moo' is the sound of _____.

- (A)  Tiger (B)  Cow
(C)  Goat (D)  Shark

7. How does a barber earn his livelihood?

- (A) By ees (B) By mending shoes
(C) By cutting hair (D) By making pots

8. Agra is one of the most famous places in the world. Why this city is so famous?

- (A) Because of leather
(B) Because of mental hospital
(C) Because of its people
(D) Because of the Taj Mahal

9. How many continents are there in the world?

- (A) Four (B) Five (C) Six (D) Seven

10. This is a game in which there are eleven players in each team. Bat and ball are the two things that are used along with other things in this game. Identify the game.

- (A) Cricket (B) Football
(C) Volleyball (D) Basket ball

ANSWERS

1. (A) 2. (B) 3. (B) 4. (C) 5. (D) 6. (B) 7. (C) 8. (D) 9. (D) 10. (A)