

12th iOM' 19

International Olympiad of
Mathematics




Presented by:
**SILVER
ZONE
FOUNDATION**
NEW DELHI - INDIA

Organized by:
Silverzone Foundation
New Delhi, India
For supremacy in Mathematics
www.silverzone.org

CLASS : 1 SAMPLE QUESTIONS

The Actual Question Paper Contains 40 Questions. The Duration of the Test Paper is 60 Minutes.

1. Which one of the following numbers comes in between?

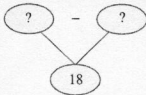


- A. 48 B. 47
C. 52 D. 50

2. Which among the following toys has the least cost in Indian rupees (₹)?



3. Which one of the following options will complete the difference given below?



(A) 2 tens - 4 ones

(B) 2 tens - 2 ones

(C) 3 tens - 2 ones

(D) 2 tens - 8 ones

4. Which one of the following numbers is *not* written on the board given below?



- (A) Sixty two
(B) Thirty two
(C) Nineteen
(D) Fifty one

5. The length of a rectangle is 5 metres more than its breadth. If the breadth of the rectangle is 23 metres, then what is the length of the rectangle?

- (A) 18 metres
(B) 16 metres
(C) 19 metres
(D) 28 metres

6. If $\bigcirc = 3$ tens, then which one of the following is true for $\bigcirc + \bigcirc + \bigcirc$?

- (A) 90 (B) 60
(C) 80 (D) 70

7. Which of the following objects is thinner than ?



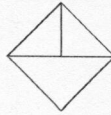
8. What will come in place of the question mark (?) in the number series given below?



- (A) 82
(C) 81

- (B) 83
(D) 84

9. How many triangles can be formed using the figure given below?



- (A) 3
(C) 5

- (B) 4
(D) 2

10. What comes next in the letter series given below?



- (A) N
(C) M

- (B) L
(D) J

ANSWERS

1. (D) 2. (C) 3. (B) 4. (B) 5. (D) 6. (A) 7. (C) 8. (B) 9. (B) 10. (C)

11th International Olympiad of Science 2019

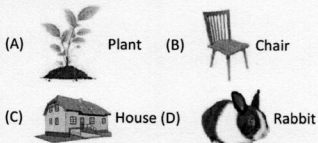


Presented by:
SILVERZONE FOUNDATION
 NEW DELHI - INDIA
 Organized by:
Silverzone Foundation
 New Delhi, India
FOR SUPREMACY IN SCIENCE
 www.silverzone.org

CLASS 1st SAMPLE QUESTIONS

The Actual Question Paper Contains 40 Questions. The Duration of the Test Paper is 60 Minutes.

1. Which one of the following can move from one place to another on its own?




2. Which one of the following statements is correct for the given picture?



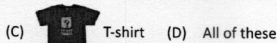

- (A) It is an egg laid by a bird.
 (B) It is an animal product and grows in water.
 (C) It is very salty in taste.
 (D) It is a plant product and grows under the soil.

3. Identify the animal based on the characteristics given below.


- i. It can live in water as well as on land.
 ii. It eats insects.
 iii. It uses its long sticky tongue to take its food inside.




4. Which one of the following clothes is specially made to worn during the winter season?



5. Identify the reptile from the following.



6. Identify the cereal from the following.




7. Who among the following uses the given instrument?




- (A) Plumber (B) Carpenter
 (C) Cobbler (D) Painter

8. Identify the healthy and nutritious food from the following.



9. Identify the insect from the following.



(D) All of these

10. Look at the following animals and choose the correct option.



Cheetah



Goat

- (A) Cheetah is a grass eating and Goat is a flesh eating animal.
- (B) Cheetah is a flesh eating and Goat is a grass eating animal.
- (C) Cheetah and Goat both are grass eating animals.
- (D) Cheetah and Goat both are flesh eating animals.



ANSWERS

1. (D) 2. (D) 3. (B) 4. (B) 5. (B) 6. (C) 7. (B) 8. (D) 9. (B) 10. (B)

12th IOEL' 20

International Olympiad of English Language



Organized by:
SILVER ZONE FOUNDATION
NEW DELHI - INDIA

Presented by:
Silverzone Foundation
New Delhi, India
For supremacy in English Language
www.silverzone.org

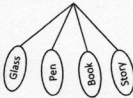
CLASS 1st SAMPLE QUESTIONS

The Actual Question Paper Contains 40 Questions. The Duration of the Test Paper is 60 Minutes.

Reading comprehension:

Holi is the festival of colours. This festival is celebrated by Hindus during Phalgun Purnima. It comes in February end or in early March. Holi festival has an ancient origin and celebrates the triumph of 'good' over 'bad'. The colourful festival bridges the social gap and renews sweet relationships. On this day people hug and wish each other 'Happy Holi'.





- Holi is the festival of _____.
(A) Fruits (B) Flowers (C) Colours (D) All of these
- Who celebrates Holi?
(A) Hindu (B) Muslim
(C) Christian (D) All of these
- In the following figure, find the word that has two alphabets of vowel.



- (A) Glass (B) Pen (C) Book (D) Story

Direction: Complete the sentence using suitable pronoun:

- My sister is a teacher. _____ teaches in the school.
(A) He (B) She (C) It (D) They
- Which one of the following is a domestic animal?

- (A)  Elephant (B)  Lion
(C)  Cow (D)  Tiger

Direction: In question 6, give the same meaning (synonym) of the word written in capital letters:

- DIFFICULT
(A) Sad (B) Poor (C) Good (D) Hard

Direction: In question 10, arrange the jumbled words to make a meaningful sentence:

- Eat, I, food, healthy.
(A) I eat healthy food. (B) I healthy eat food.
(C) Eat healthy food I. (D) All of these
- Write the name of the vegetable shown in the picture below, as per given hint.
(c _____ r)



- (A) Cauliflower (B) Caliper
(C) Carpenter (D) Carder

- Which one of the following options represents the figure in correct alphabetical order?



- (A) Orange, banana, mango, pineapple
(B) Banana, mango, orange, pineapple
(C) Banana, orange, pineapple, mango
(D) All of these

- Which one of the following options is correct for the given picture?



- (A) A dog is sitting on the chair.
(B) A dog is sitting in the chair.
(C) A dog is sitting at the chair.
(D) All of these

ANSWERS

1. (C) 2. (A) 3. (C) 4. (B) 5. (C) 6. (D) 7. (A) 8. (A) 9. (B) 10. (A)

10th SmartKid GK Olympiad'19

Smart Kid
General Knowledge Olympiad



Presented by:
**SILVER
ZONE
FOUNDATION**
NEW DELHI - INDIA

Organized by:
Silverzone Foundation
New Delhi - India

www.silverzone.org

CLASS 1st: SAMPLE QUESTIONS

The Actual Question Paper contains 40 questions. The duration of the test paper is 60 minutes.

1. Choose the fastest means of transport from the following options.



Aeroplane



Bus



Car




Cruise Ship

2. This is the festival of colours. People celebrate this festival by applying colours upon each other. Name the festival.

(A) Diwali
(C) Holi

(B) Dussehra
(D) Raksha Bandhan

3. Which one of the following is a wild animal?





4. Fish lives in ponds, lakes, rivers, etc. What kind of animal the fish is?

(A) Land animal
(C) Aerial animal

(B) Water animal
(D) None of these

5. Which one of the following is the picture of the Red Fort?



6. Why 15th August is very important for India?

(A) India got independence from the British on this day
(B) India won the war against Pakistan on this day
(C) India made atom bomb on this day
(D) None of these

7. When is the 'World Earth Day' celebrated every year?



(A) March 15
(B) April 12
(C) March 22
(D) April 22

8. Which of the following is river(s)?

(A) Ganga
(B) Yamuna
(C) Brahmaputra
(D) All of these


9. What is the other name of India?

(A) Indiana
(B) Bharti
(C) Hindustan
(D) All of these

10. Where do the Christians pray?



Church



Temple



Mosque



Gurudwara

ANSWERS

1. (A) 2. (C) 3. (D) 4. (B) 5. (D) 6. (A) 7. (D) 8. (D) 9. (C) 10. (A)